



Numbers Place value

Place value is the value of each digit in a number.

For two digit numbers, there is the tens place and one's place.



Q 1. Write these numbers in tens and ones.

11 —

14 —

13 —

20 —

17 —

15 —

10 —

18 —





Q 2. Write place value of underlined digit.

1 <u>4</u>		<u>6</u> 8	
6 <u>5</u>		1 <u>6</u>	
<u>8</u> 0		<u>2</u> 2	
4 <u>8</u>		<u>7</u> 3	

Q 3: Complete the table.

Number	Place value		Digit value	
	49	4		4
9			9	9
80	8		8	80
	0		0	0

Q 4: Fill in the blanks.

i. 2 tens _____ ones = 20

ii. _____ tens 9 ones = 29

iii. 16 = _____ tens 6 ones

iv. 43 = 4 tens _____ ones

v. 49 = _____ tens _____ ones

vi. 37 = _____ tens _____ ones



Fill in the boxes.

8 tens and 4 ones

3 tens and 9 ones

5 tens and 8 ones

9 tens and 9 ones

7 tens and 4 ones

6 tens and 1 ones

8 tens and 9 ones

4 tens and 2 ones

9 tens and 2 ones

3 tens and 5 ones



Fill in the blanks.

54	<input type="text"/>	tens	<input type="text"/>	ones
78	<input type="text"/>	tens	<input type="text"/>	ones
91	<input type="text"/>	tens	<input type="text"/>	ones
63	<input type="text"/>	tens	<input type="text"/>	ones
82	<input type="text"/>	tens	<input type="text"/>	ones
73	<input type="text"/>	tens	<input type="text"/>	ones
41	<input type="text"/>	tens	<input type="text"/>	ones
93	<input type="text"/>	tens	<input type="text"/>	ones
36	<input type="text"/>	tens	<input type="text"/>	ones
28	<input type="text"/>	tens	<input type="text"/>	ones
47	<input type="text"/>	tens	<input type="text"/>	ones
87	<input type="text"/>	tens	<input type="text"/>	ones



Write in place value chart.

35
_____ tens
_____ ones

42
_____ tens
_____ ones

76
_____ tens
_____ ones

89
_____ tens
_____ ones

95
_____ tens
_____ ones

60
_____ tens
_____ ones



Write the numbers.

6 tens 8 ones	= _____
------------------	---------

5 tens 0 ones	= _____
------------------	---------

7 tens 2 ones	= _____
------------------	---------

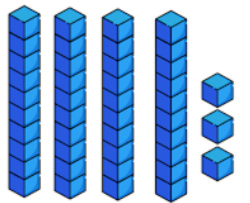
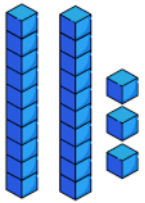
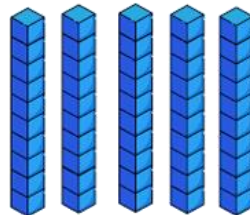

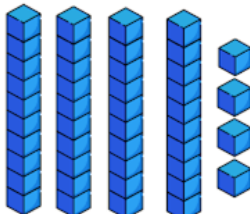

Guess the Number!

I have 3 ones and 4
tens.
Which number am I?

= _____

I have 3 ones and 4
tens.
Which number am I?

= _____

	<input type="text"/>		<input type="text"/>
	<input type="text"/>		<input type="text"/>
	<input type="text"/>		<input type="text"/>